

SOCIAL STUDIES TERM II SPECIAL (SET 3) 2020/202

Name: Stream

SECTION A (40 MARKS)

1. What is a sketch map?

.....

2. By what process were rift valley lakes formed?

.....

3. State one measure taken by the government to reduce illiteracy.

.....

4. Which type of farming provides double income to the farmer?

.....

5. Name the landform found between a plateau and a highland.

.....


6. Why are health parades important in a school?

.....

7. How did the Nandi and Masai make the movements of explorers to East Africa difficult?

.....

8. Draw a road sign for **Speed humps ahead**.



9. How are deciduous trees able to survive in dry conditions?

.....

10. Name the flag which was replaced by the Union Jack.
.....
11. Why is terracing not common in central Uganda?
.....
12. Mention the words found on the East African Community Emblem.
.....
13. How should farmers in dry areas grow their crops without natural rainfall?
.....
14. Why is a barometer kept in the Stevenson screen at a weather station?
.....
15. Give one historical tourist attraction found in East Africa.
.....
16. Which element of a map can one use to find the distance between two places?
.....
17. State one effect of landslides in Mountainous areas.
.....
18. Mention one product got from dairy farm.
.....
19. State one way how people benefit from the taxes paid to the government.
.....
20. Why was the coming of Capt. F. D Lugard important to Toro Kingdom?
.....
21. Give one economic activity carried out in savanna grassland areas.

.....

22. How many countries share borders with Uganda?

.....

23. State one contribution made Alexander Mackay in Uganda.

.....


24. Give one problem faced by nomadic pastoralists in East Africa.

.....

25. Mention one importance of having laws in a community.

.....

26. Identify the type of budget illustrated below;



.....

27. State one proper method of managing wastes in the environment.

.....

28. Give one advantage of living in urban areas.

.....

29. Compare the Bagisu and the Chagga in terms of culture?

.....

30. What contribution was made by Sir Samuel Baker in Northern Uganda?

.....

31. Write **EALA** in full.

.....

32. Give one way how parents mistreat their children at home.

.....

33. Which organization united East African countries before 1977?

.....

34. How do people of Uganda benefit from the coming of investors?

.....

35. What is the Population density of an area with 400,000 people if its area is 800 Square Kilometer?

..... For questions 36 to 40, answer either Christianity or Islam but not both.

36. **Either:** How is lent period important to Christians?

.....

OR: How is Hijja important in Islam?

.....

37. **Either:** What name is given to the last meal Jesus had with His disciples?

..... **OR:** What name is given to the early morning meal for Moslems during Ramadhan?

.....

38. **Either:** Give one way you can care for God's creation.

.....

OR: Identify one way you can care for God's creation.

.....

39. **Either:** State one value of baptism to Christians.

.....

OR: State one value of circumcision to Moslems.

.....

40. **Either:** Who led the Israelites into the Promised Land?

.....

OR: Why is Prophet Musa remembered in Islam?

.....

SECTION B (60 MARKS)

41. a) What is meant by the term mining?

.....

.....

b) Which mineral was discovered in the area around Lake Albert?

.....

c) State two importance of the mining industry to the people of Uganda.

I)

II)

42. a) Give two reasons why Uganda trades with her neighbours.

I)

II)

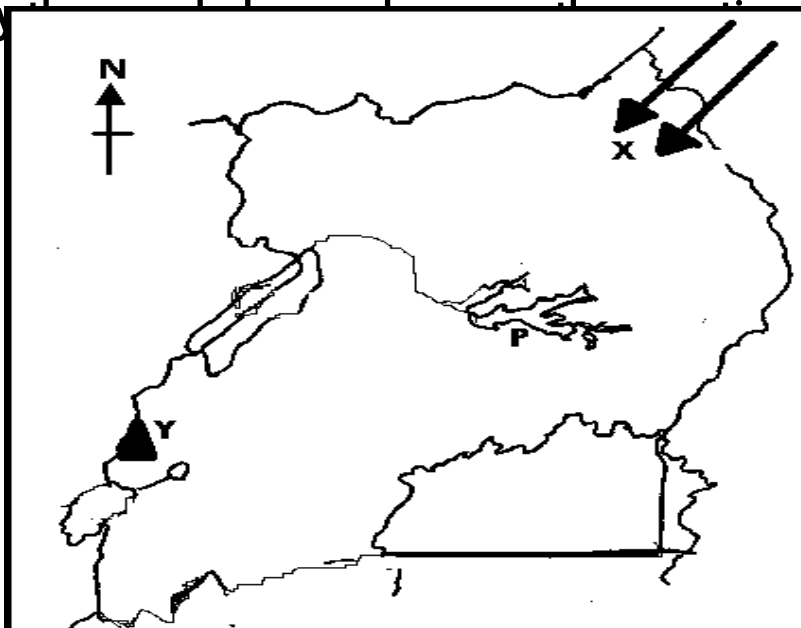
b) How is Port Mombasa important to Uganda?

.....

c) Give one problem faced by Uganda due to her location.

.....

43. Study the map of Uganda that follow;



a) Which tribal moved through route X?

.....

b) Why is the peak of Mountain Y snowcapped throughout the year?

.....

c) Identify the direction from mountain Y to Lake P.

.....

d) State one reason why Lake P is swampy.

.....

44. a) Give the meaning of the term Government.

.....

.....

b) Name two organs of a democratic government.

I)

II)

c) State the organ of government which punishes law breakers.

.....

45. a) What is Nyero Stone Age site famous for?

.....

b) Give two importance of archaeological sites.

I).....

II).....

c) State one other source of history besides archaeology.

.....

46. a) How does transport promote trade in a country?

.....

b) Give two means of water transport.

I).....

II)

c) Why is navigation difficult along the Victoria Nile?

.....

47. a) Which official on the L.C I committee is responsible for children's rights?

.....

b) Write any two of the children's rights.

I)

II)

c) State one way how children's rights are violated.

.....

48. a) What is meant by the term **independence**?

.....

.....

b) Give two ways Ugandans used to demand for their independence.

I).....

II).....

c) Name the nationalist who led Uganda to independence.

.....

49. a) Give one importance of vegetation to wild animals.

.....

b) State any two factors which influence vegetation distribution.

I).....

II).....

c) Mention the vegetation zone where most game parks are found.

.....

50. Match the crops in List A with their uses in

List B List A (crops)

List B (uses)

Cotton

used to make cooking oil

Sugar canes

used to make insecticides

Oil Palm

used to make clothes

Pyrethrum

used to make sugar

I) Cotton

II) Sugarcanes

III) Oil Palm

IV) Pyrethrum.....

For questions 51-54, answer EITHER Christianity OR Islamic but not

51. **EITHER** a) What event took place on Pentecost day?

.....

b) In which two ways was the Holy Spirit important to the Apostles?

I)

II)

c) State any one symbol of the Holy Spirit.

.....

OR: a) Differentiate between Iman and Imam.

.....

.....

b) Mention any two pillars of Islam

I)

II)

c) What role is played by the Muezzin in Islam?

.....

52. Either: a) Why did Jesus call apostles?

.....

b) Write brief notes about the following apostles of Jesus;

i) Simon Peter

.....

ii) Judas Iscariot

.....

iii) Matthew

.....

OR a) Give the meaning of the term Prophet?

.....

b) Give one role which was played by prophets in the Qu'ran.

.....

c) Which Prophet in Islam is remembered for building the Kaaba?

.....

d) In which town was Prophet Mohammed buried?

.....

53. Either: a) Who taught the apostles how to pray?

.....

b) Mention two requests made in the Lord's Prayer.

i)

ii)

c) Give one other way of communicating to God besides prayer.

.....

Or: a) On which day do Muslims attend Juma prayers?

.....

b) Why do Moslems attend Juma prayers?

.....

c) State any two conditions that may spoil Salat.

i).....

ii).....

54. **Either:** a) State any two of the Ten Commandments God gave to Moses.

i).....

ii).....

b) In which way are God’s commandments important to Christians?

.....

c) Give one reason why Christians read the Bible.

..... **OR** a) Mention any two holy books in Islam apart from the Koran

i)..... ii)

.....

b) Give two reasons why Muslims read the Qur’an.

i).....

ii)

55. **For all** Give two reasons why people in your community work today.

i)

ii)

a) State two examples of work done by people in your community.

I)

II)

END